



Klasa 1 Dział Odejmowanie w zakresie 20.


Wykonaj działania. Odszukaj wynik na kratownicy i zamaluj kwadrat według podanego wzoru.




$5 - 3 =$




$6 - 2 =$




$19 - 4 =$




$17 - 5 =$




$10 - 5 =$




$20 - 6 =$



$11 - 2 =$




$13 - 6 =$




$11 - 8 =$



$14 - 8 =$




$16 - 8 =$




$20 - 10 =$



$20 - 9 =$



$20 - 4 =$



$19 - 6 =$



$16 - 15 =$

2	14	15	1
7	5	10	12
8	3	9	16
11	13	6	4

lokomotywa

